

# Azaan International School

## Activity sheet VI (2019-20)

Grade - II

Sec: \_\_\_\_\_

Subject- E.V.S

Name: \_\_\_\_\_

Date: \_\_\_\_\_

### Lesson No.17. Means of Communication.

#### I. Fill in the blanks.

1. When we talk or write a letter to someone, it is known \_\_\_\_\_ (transportation/communication)
2. A \_\_\_\_\_ is one of the fastest means of communication. (letter/telephone)
3. A \_\_\_\_\_ is the cheapest means of communication. (Television/Newspaper)
4. A computer helps us to connect and communicate with people in the world through \_\_\_\_\_ (post/internet)
5. We can send letters to others by \_\_\_\_\_ (mobile/post)

#### II. Draw any two means of communication and name them.

--	--

#### III. Match the following.

1. Fax machine



2. Television



3. Computer



4. Mobile phone



5. Letterbox



**IV. Write true or false.**

1. Postman collects the letters from the letter box [            ]
2. News paper is the fastest means of transport. [            ]
3. We can send letters to others by internet. [            ]
4. We should use means of communication wisely. [            ]
5. We can find lot of information on internet. [            ]

# Azaan International School

## Activity sheet VI (2019-20)

Grade - II

Sec: \_\_\_\_\_

Subject- Math

Name: \_\_\_\_\_

Date: \_\_\_\_\_

### Chapter- 14 & 15 (Measuring Capacity & Money)

#### I. Fill in the blanks.

- a. The amount of liquid that a container can hold is called its \_\_\_\_\_.  
(length/capacity)
- b. We use \_\_\_\_\_ to measure capacity. (grams/millilitres)
- c. You need \_\_\_\_\_ to buy things. (money/mouse)
- d. \_\_\_\_\_ is the currency of India. (Rupee/Dollar)

#### II. Mark a tick against the container which can hold more liquid.


a)



b)



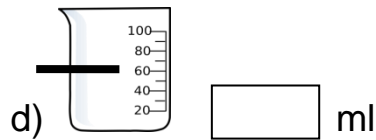
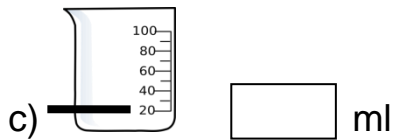
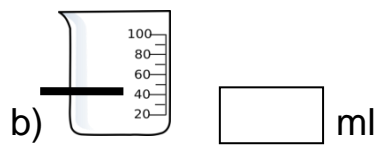
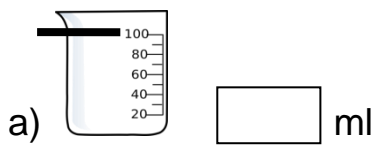
c)



d)



III. Look at the beakers shown below and write how many millilitres (ml) of water each beaker holds.



### VI. Word Problems

1. Tina had 30ml of curd and her sister Rina had 46ml of curd. Who had more curd and by how much more?

Word statement	T	O
Curd Rina had		ml
Curd Tina had	–	ml
Difference		ml

\_\_\_\_\_ had \_\_\_\_\_ ml of curd more.

2. To make a mixed fruit juice 35ml of orange juice, 27ml of pineapple juice and 29ml of litchi juice were added. How many mixed fruits juices were made?

Word Statement	T	O
Orange juice mixed		ml
Pineapple juice mixed		ml
Litchi juice mixed	+	ml
Total mixed juice made		ml

3. 65ml of honey was extracted from a beehive. After packing a bottle of honey, 23ml of honey was left. How much honey was packed in bottle?

$$\boxed{\phantom{00}} - \boxed{\phantom{00}} = \boxed{\phantom{00}}$$

\_\_\_\_\_ of honey was packed in a bottle.

4. A pan had 95ml of hot milk. And 58ml of hot milk was poured in a cup. How much milk is now left in the pan?

Word statement	T	O
Hot milk in pan		ml
Milk poured in a cup	—	ml
Milk left in pan		ml

\_\_\_\_\_ milk is left in the pan.

**V. Make different combinations of the following.**

a) ₹ 25

$$\boxed{\phantom{00}} + \boxed{\phantom{00}} + \boxed{\phantom{00}} + \boxed{\phantom{00}} + \boxed{\phantom{00}}$$

$$\boxed{\phantom{00}} + \boxed{\phantom{00}} + \boxed{\phantom{00}} + \boxed{\phantom{00}} + \boxed{\phantom{00}}$$

$$\boxed{\phantom{00}} + \boxed{\phantom{00}} + \boxed{\phantom{00}} + \boxed{\phantom{00}} + \boxed{\phantom{00}}$$

b) ₹70

$$\boxed{\phantom{00}} + \boxed{\phantom{00}} + \boxed{\phantom{00}} + \boxed{\phantom{00}} + \boxed{\phantom{00}}$$

$$\boxed{\phantom{00}} + \boxed{\phantom{00}} + \boxed{\phantom{00}} + \boxed{\phantom{00}} + \boxed{\phantom{00}}$$








$$\boxed{\phantom{00}} + \boxed{\phantom{00}} + \boxed{\phantom{00}} + \boxed{\phantom{00}} + \boxed{\phantom{00}}$$

## VI. Word Problems.

1. Aryan bought ice cream for Rs 75. He gave Rs100 to the shopkeeper. How much money did Aryan get back from the shopkeeper?

Word Statements	T	O
Money Aryan gave to Shopkeeper		
Aryan bought ice cream for		
Money returned back by the shopkeeper		

**VII. Look at the box given below and select the items you can buy from Rs 100.**

	Chocolates – Rs 25		Chips – Rs 10
	Pencil box – Rs 20		Crayons – Rs 30
	Juice – Rs 10		Ice cream – Rs 15
			Book – Rs 50

**Now list out the items you have selected and add its price.**

Items selected	Price (Rs)